

Haslingden High School

Year 7

Music

Homework

Booklet

Name	Form
------	------



WWW

IOTI



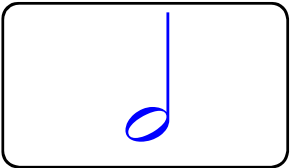
DURATION

Duration is how long or short notes are



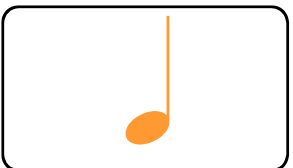
Semibreve

4 beats



Minim

2 beats



Crotchet

1 beat



Quaver

1/2 beat



Semiquaver

1/4 beat



Name: _____

Date: _____

Note Values



Write < , > or = for each equation.






	<input data-bbox="475 678 593 806" type="text"/>			<input data-bbox="1050 678 1168 806" type="text"/>	
	<input data-bbox="475 884 593 1012" type="text"/>			<input data-bbox="1050 884 1168 1012" type="text"/>	
	<input data-bbox="475 1086 593 1214" type="text"/>			<input data-bbox="1050 1086 1168 1214" type="text"/>	
	<input data-bbox="475 1288 593 1415" type="text"/>			<input data-bbox="1050 1288 1168 1415" type="text"/>	
	<input data-bbox="475 1489 593 1617" type="text"/>			<input data-bbox="1050 1489 1168 1617" type="text"/>	









Name: _____


Music Addition! 1




Write the number of beats next to each rhythm, then determine the **sum** of each equation.




1.  +  +  = _____




2.  +  +  = _____

3.  +  +  = _____




4.  +  +  = _____




5.  +  +  = _____

6.  +  +  = _____

7.  +  +  = _____

8.  +  +  = _____


9.  +  +  = _____




10.  +  +  = _____




Name: _____

Music Addition! 2



Write the number of beats next to the rhythms, then determine the **sum** of each equation.

1.  +  +  = _____



2.  +  +  = _____




3.  +  +  = _____

4.  +  +  = _____



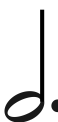
5.  +  +  = _____

6.  +  +  = _____






7.  +  +  = _____

8.  +  +  = _____

9.  +  +  = _____

10.  +  +  = _____

Compose a 4 bar rhythm using a mixture of the notes and rests that you have learned about in lessons and have identified in this work booklet.

	Semibreve	4 beats
	Minim	2 beats
	Crotchet	1 beat
	Quaver	½ beat
	Semiquaver	¼ beat

Each of the boxes below represent a bar of music. Each bar should be made up of 4 beats.

You should use a longer note value at the end of your rhythm.

--	--	--	--